


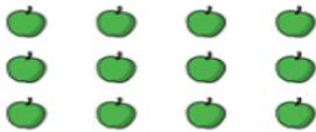
Maths

1 Circle each row of sweets.



How many rows are there?

2 Circle each column of apples.



How many columns are there?

3 Make this array.



Complete the sentences.

a) There are  counters in each row.

There are  rows.

There are  counters altogether.

b) There are  counters in each column.

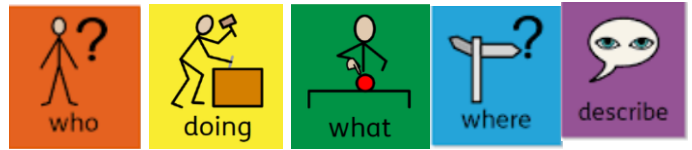
There are  columns.

There are  counters altogether.

English

Write a sentence about the pictures from the story 'The Three Little Pigs'. Remember to follow our sentence structure and use a capital letter, finger space and full stop.

e.g. *The children are running through the long wavy grass.*




---

---

---

---




---

---

---

---

Phonics



Please check Oxford Owl and read your child's phonics book!

Spelling words

Please practice these spellings: please, sheep, make, spray

---

---

---

---

