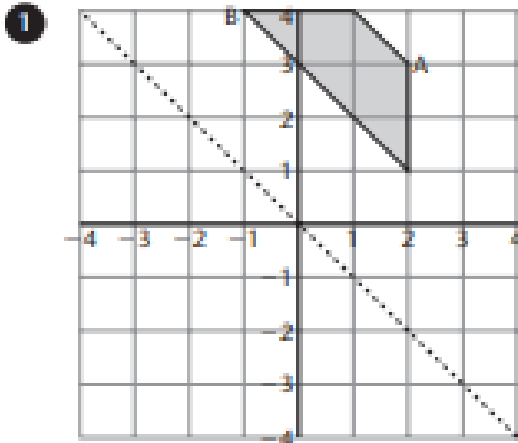


Sketch the reflections of each shape:

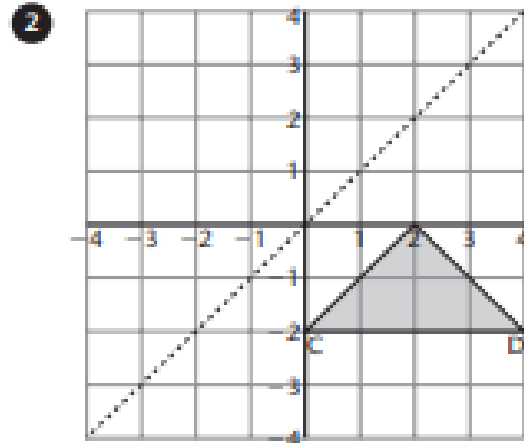
a) in the mirror line

b) in the  $x$  axis.

Give the co-ordinates of the points A - D in the original shape and in both reflections.



A ..... (2, 3) .....  
 .....  
 .....  
 B .....  
 .....  
 .....



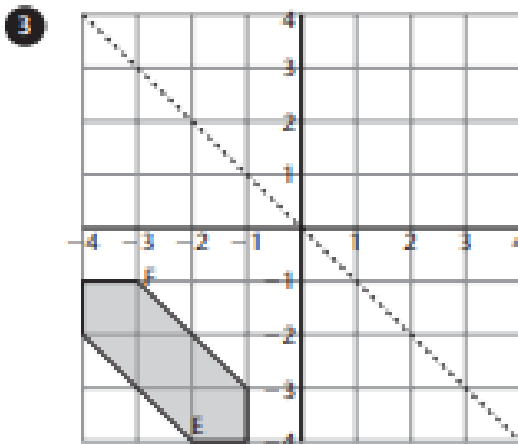
C .....  
 .....  
 .....  
 D .....  
 .....  
 .....

Sketch the reflection of each shape:

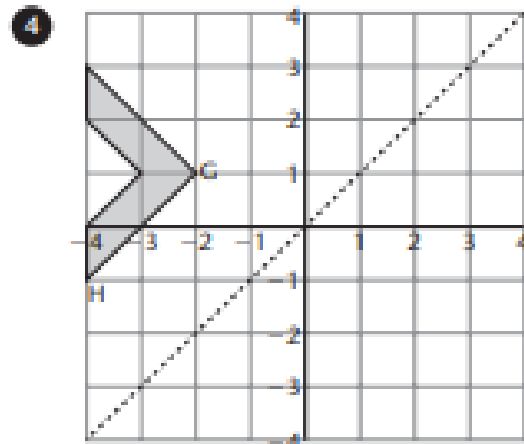
a) in the mirror line

b) in the  $y$  axis.

Give the co-ordinates of the points E - H in the original shape and in both reflections.



E .....  
 .....  
 .....  
 F .....  
 .....  
 .....



G .....  
 .....  
 .....  
 H .....  
 .....  
 .....