

Year 4 Homework

Friday 27th February

2026

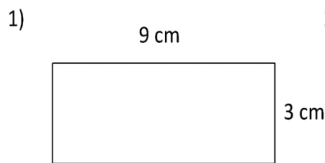
- Homework is set every **Friday** and must be returned the following **Tuesday**.
- Please use a sharp writing pencil. A ruler should be used when drawing straight lines.

Maths

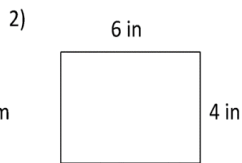
Please spend some time on TTRS this week.

Task 1

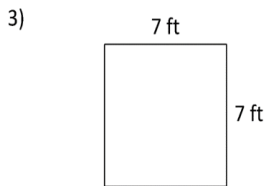
Work out the perimeter of the following rectangles. They are not to scale



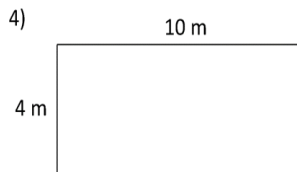
Perimeter = _____ cm



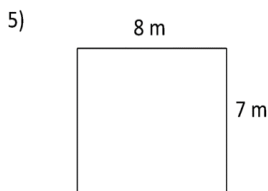
Perimeter = _____ in



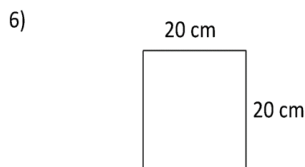
Perimeter = _____ ft



Perimeter = _____ m



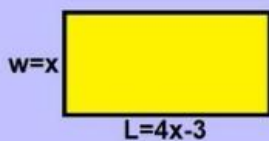
Perimeter = _____ m



Perimeter = _____ cm

The length of a rectangle is 3 less than 4 times the width. The perimeter is 34. Find the length and width.

Let x = width
 $4x-3$ = length



$P = 2w + 2L$
 $34 = 2x + 2(4x-3)$

Grammar and punctuation

Research

Research plastic pollution in oceans. You may want to think about the following:

What is plastic pollution? How is it affecting our oceans? What is being done to reduce plastic pollution? Are there any organisations working to reduce plastic pollution and spread awareness?

You may want to focus on one of the following:

Plastic pollution and coral reefs

Plastic pollution and sharks

Plastic pollution and whales

Plastic pollution and turtles

Endangered ocean species due to plastic pollution

Plastic pollution in oceans near your home country

Task 1

Circle the sentences which show Standard (correct) English.

I done my exercises.

They did their homework.

I do my homework today.

He done his homework.

I have done my exercises.

I did my exercises.

Task 2

Rewrite this sentence in the **present tense**.

We watched as our brother caught the ball to win the match.

Rewrite these words so that they are in their singular form.

a) bridges = _____

b) geese = _____

c) babies = _____

Spelling words

Rule: 'que' is a 'c' sound like in cat. 'gue' is a 'g' sound like 'gate'.

antique, cheque, dialogue, catalogue,
colleague, fatigue, grotesque, league,
tongue, unique