

- Homework is set every Friday and must be returned the following Tuesday.
- Please use a sharp writing pencil. A ruler should be used when drawing straight lines.

Maths

Arithmetic

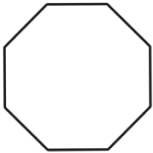
$21 + 8 = \underline{\quad}$	$37 - 6 = \underline{\quad}$	$50 \div 10 = \underline{\quad}$	$3 \times 5 = \underline{\quad}$
$19 - 4 = \underline{\quad}$	$25 \div 5 = \underline{\quad}$	$6 \times 10 = \underline{\quad}$	$17 + 5 = \underline{\quad}$

Shape: Write the number of sides and the shape names.



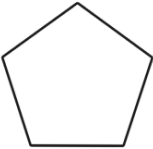
A hexagon has _____ sides.

A hexagon has _____ corners.




A octagon has _____ sides.

A octagon has _____ corners.



A pentagon has _____ sides.

A pentagon has _____ corners.



A circle has _____ sides.

A circle has _____ corners.

Name a 2D shape that has no straight sides.

Name a 2D shape that has 6 sides.

Times tables:

Write the 10 x tables, 5 x tables and 2 x tables up to x 12.

Grammar and Punctuation

Add the correct punctuation mark in the box below.

Where are the pens and pencils

Add the correct punctuation mark in the box below.

Are we going to the shops now

Writing

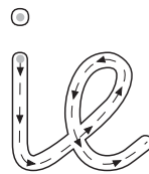
Task: Write an acrostic poem about winter

Success Criteria:

- Rhyme
- Expanded noun phrases
- Figurative language

W
I
N
T
E
R

Handwriting



A Trace and write the pattern and the letters.

ere ere

ie ie

B Trace and write the words and the sentence.

is is

bike bike

I asked why my bike is white.

Spelling words

No spelling test this week. Please practice the Year 2 common exception words.