

- Homework is set every Friday and must be returned the following Tuesday.
- Please use a sharp writing pencil. A ruler should be used when drawing straight lines.

Maths

Arithmetic

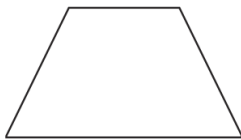
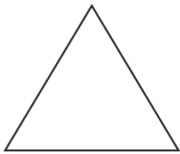
$30 + 40 + 10 =$

$30 + 10 + 50 =$

$10 + 60 + 20 =$

$20 + 30 + 50 =$

Shape: Write the number of sides and the shape names.

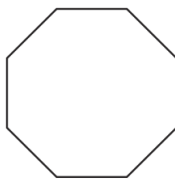
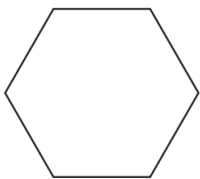


Number of sides _____

Number of sides _____

Name _____

Name _____

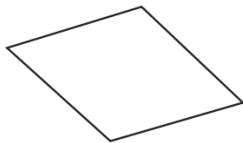
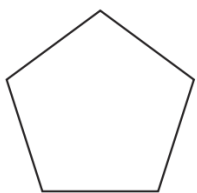


Number of sides _____

Number of sides _____

Name _____

Name _____



Number of sides _____

Number of sides _____

Name _____

Name _____

Times tables:

Write the 5 x tables and 2 x tables up to x 12 in your book.

Grammar and Punctuation

Add a **suffix** to the word fall to complete the sentence below.

The autumn leaves are fall _____ to the ground.

Add a **suffix** to the word colour to complete the sentence below.

The costume was very colour _____ with bright red ribbons.

Add a **suffix** to make the word proud an **adverb**.

Seth walked proud _____ across the stage.

Writing

Task: Design an invite for Mrs Khan to our Christmas Nativity performance.

Success Criteria:

- Write in full sentences
- Use capital letters and full stops.
- Date and time of event.

Example:



Dear _____

Please join Year 2 for our Christmas Nativity performance in Yew Hall at 9am on the 17th of December. We can't wait to share our singing with you!

From _____

Handwriting

A Trace and write the pattern and the letters.

eee eee

ee ee

ea ea

ey ey

B Trace and write the words.

see see

sea sea

key key

Spelling words

Please practice the spelling words for this week:
(Try using them in a sentence)

flies tries copies babies carries