



Maths – homework – week 4.

This week we have been practising addition and number bonds to 20. Complete the worksheet below.

First, there are 10 children on the bus. Then 6 more get on the bus.



How many children are on the bus now? Complete the ten frames and the sentences.



$$\underline{\quad} + \underline{\quad} = \underline{\quad}$$

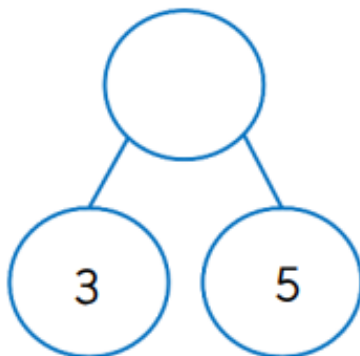
Now there are children on the bus.

Colour all the number bonds to 20.

$4 + 6$	$13 + 7$	$10 + 10$	$0 + 10$
$8 + 8$	$5 + 15$	$0 + 19$	$4 + 16$
$14 + 6$	$19 + 1$	$20 + 0$	$9 + 10$

Make your own puzzle.

Complete the part-whole model.



Complete the part-whole model.

