



Spring **Addition and Subtraction** Home Learning

Name: _____

Draw counters to work out the doubles:



Double 3 is _____




Double 7 is _____

Zach is working out doubles and near doubles. Complete the sentences.



I can use double 3 to work out $4 + 3$



$3 + 3 =$ _____

$4 + 3 =$ _____

$4 + 3$ is equal to double _____ plus 1

Complete the subtractions.

$5 - 1 =$

$8 - 3 =$

$15 - 1 =$

$18 - 3 =$

$10 - 4 =$

$9 - 2 =$

$20 - 4 =$

$19 - 2 =$

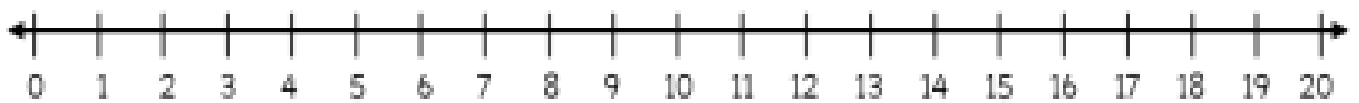
Name: _____

Tia has 14 stickers.



She gives 8 of her stickers to Leanna.



How many stickers does she have now?



Tia has _____ stickers now.

Leanna has 14 pencils.
Malachi has 19 pencils.

Leanna

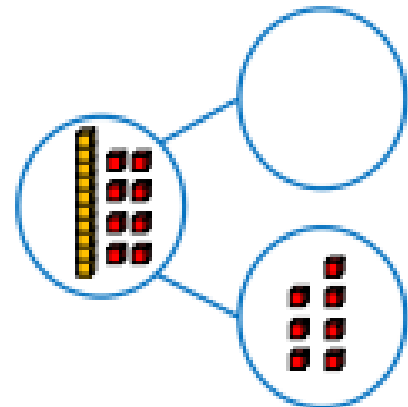


Malachi

What is the difference between the number of pencils?

The difference between 14 and 19 is _____.

Complete the part-whole model and number sentence.



_____ + 7 = 18

Complete the fact family for the bar model.



_____ + _____ = _____

_____ - _____ = _____

_____ + _____ = _____

_____ - _____ = _____

