

Year 4 Homework

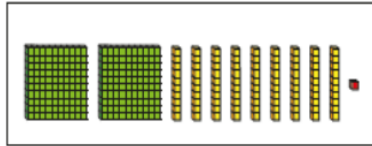
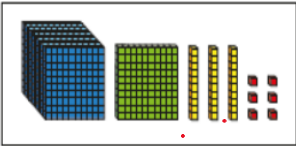
Friday 26th September 2025

- Homework is set every **Friday** and must be returned the following **Wednesday**.
- Please use a sharp pencil.
- A ruler should be used when drawing straight lines.

Maths

Place Value

Which is the greater number? How do you know?

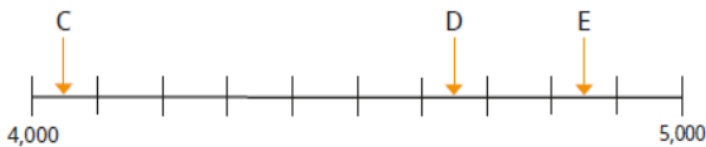
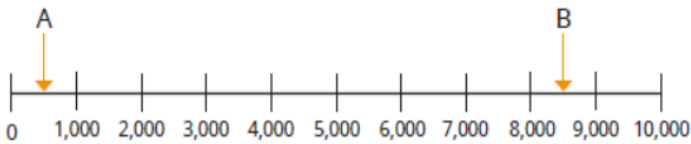


Complete the sentences.


_____ is less than _____

_____ is greater than _____

Estimate the numbers the arrows are pointing to.



Find 100 more than the number shown.



English

Write down **10 nouns** (a person, place or thing) that you can see in your home.

- 1.
- 2.
- 3.
- 4.
- 5.
- 6.
- 7.
- 8.
- 9.
- 10.



Write a **setting description** including **similes** and **personification** of the trees or other objects you can see. Personification is giving a non-human form human characteristics.

Spelling

- | | |
|--------------|--------------|
| 1. mixture | 8. torture |
| 2. leisure | 9. picture |
| 3. puncture | 10. reassure |
| 4. enclosure | 11. pressure |
| 5. closure | 12. ensure |
| 6. future | 13. measure |
| 7. posture | 14. assure |