

Year 3 Homework

Friday 31st January 2025

- Homework is set every **Friday** and must be returned the following **Tuesday**.
- Please use a sharp pencil.
- A ruler should be used when drawing straight lines.

Maths

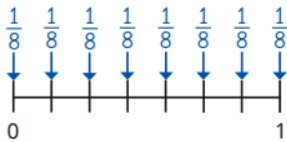
Fractions

Draw number lines split into the number of parts.

Label the fractions shown.

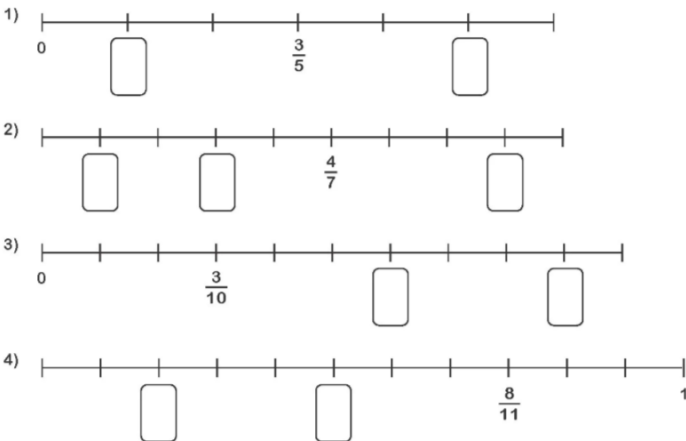
- a) 4 parts b) 8 parts c) 3 parts

Eva is working out what fraction is shown on the number line.

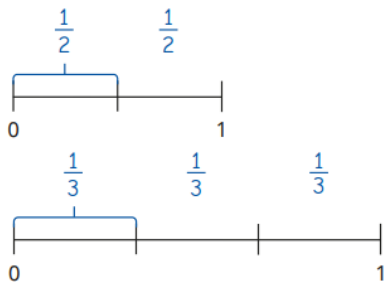


The number line shows eighths.

What mistake has Eva made?



Tiny has drawn two number lines.



$\frac{1}{3}$ is greater than $\frac{1}{2}$

Do you agree with Tiny? Explain your reasons.

English

Grammar and Punctuation

1. Is this pen yours _____ mine?
2. The dog took the bone _____ buried it.
3. He likes the red bag _____ not the blue one.
4. Mark sat on the sofa _____ slept off.
5. Do you like milk _____ tea?
6. You must hurry _____ you will be late.
7. Susan likes to sing _____ dance.
8. This dog is small _____ brave.
9. Please pass me a spoon _____ a fork.
10. I like sunshine _____ not the rain.

and but or

Science

Is this food healthy or unhealthy? Why?

Each serving contains

Energy 2218kj 533kcal	Fat 34.5g	Saturates 16.1g	Sugars 2.3g	Salt 1.25g
27%	49%	81%	3%	21%