

Year 3 Homework

Friday 28st March 2025

- Homework is set every **Friday** and must be returned the following **Tuesday**.
- Please use a sharp pencil.
- A ruler should be used when drawing straight lines.

Maths

1 Match the pictures to the turns.



full turn

half turn

quarter turn

2 First the arrow is pointing up.

Then it turns half a turn.




a) Draw to show what the arrow looks like now.



b) Complete the sentence.

Now the arrow is pointing _____

3 Match the pictures to the turns.



quarter turn
clockwise

quarter turn
anticlockwise

three-quarter turn
clockwise

three-quarter turn
anticlockwise

Choose words to complete the sentences.

quarter

half

three-quarter

clockwise

anticlockwise

a)

before



after



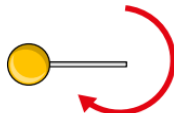
The ladybird has turned a _____ turn _____

b)

before



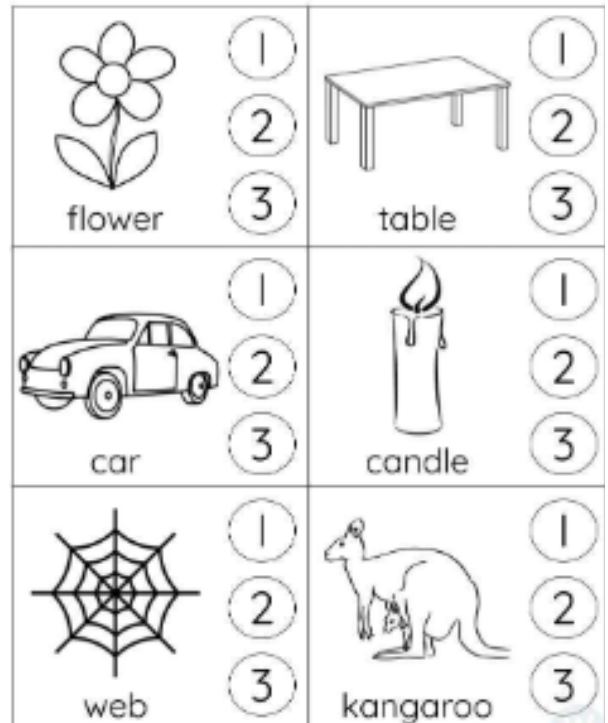
after



The lollipop has turned a _____ turn _____

English

Count and shade the number.



Science

Vocabulary to learn:

Fair test