

Year 3 Homework

Friday 21st March 2025

- Homework is set every **Friday** and must be returned the following **Tuesday**.
- Please use a sharp pencil.
- A ruler should be used when drawing straight lines.

Maths

- 1 Fay has a piece of ribbon.

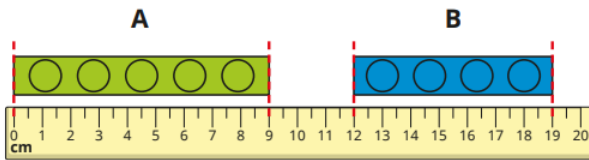


She cuts the ribbon into two pieces.



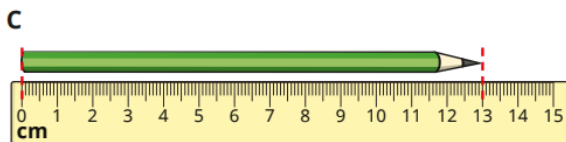
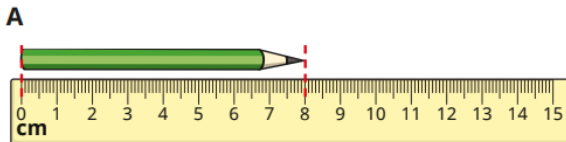
How long was the ribbon before Fay cut it?

- 2 Kim measures the lengths of two bricks.



How much longer is brick A than brick B?

- 3 Mo measures his pencil at the start of Year 2, halfway through Year 2 and at the end of Year 2



- a) Which picture (A, B or C) shows the pencil at the start of Year 2?

English

Underline all the verbs in this sentence:

Tomorrow, we are playing in the cup final.



Are these sentences commands, exclamations, statements or questions?

Did you see the news

How terrible that is

Science

Vocabulary to learn:

Contract Relax