

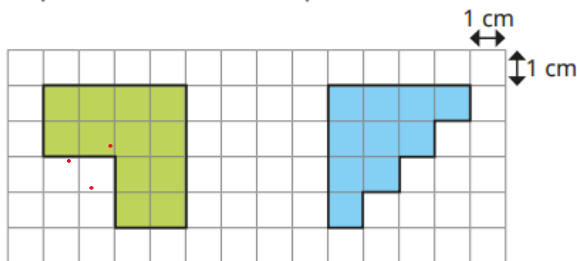
Year 3 Homework

Friday 14th March 2025

- Homework is set every **Friday** and must be returned the following **Tuesday**.
- Please use a sharp pencil.
- A ruler should be used when drawing straight lines.


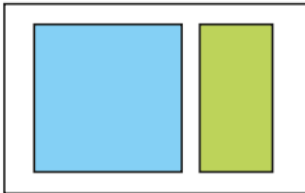
Maths

Work out the perimeters of the shapes.

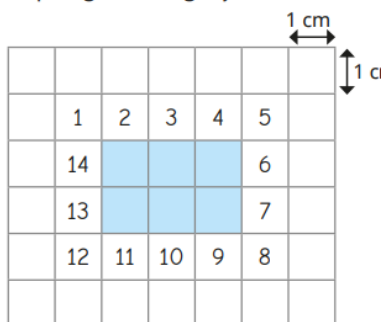


Which shape has the greater perimeter in each pair?

How do you know?



Tiny is finding the perimeter of the shape by counting squares.



The perimeter is 14 cm

What mistake has Tiny made?
Find the correct perimeter.

English

Example:

“Knock, knock,” Mr Mischief smirked mischievously.

“I hate jokes! Who’s there?” fussed Mr Fussy.

“Cows go,” Mr Mischief smirked mischievously again.

“Cows go who?” said Mr Fussy, frowning fussily.

A laughing Mr Mischief answered, “No. Cows go moo! Ha!”

Your task is to show me that you know how to punctuate dialogue correctly.

1. I would like you to choose two ‘knock knock’ jokes.

2. Then think of 2 Mr Men to help you tell the different parts of the joke. You can make up your Mr Men or Little Miss character.

3. Make sure you add reporting clauses to show me how the characters are behaving as they speak.

Science

Remember to make your moving muscles to bring to class!