

Year 3 Homework

Friday 20th June 2025

- Homework is set every **Friday** and must be returned the following **Tuesday**.
- Please use a sharp pencil.

A ruler should be used when drawing straight lines.

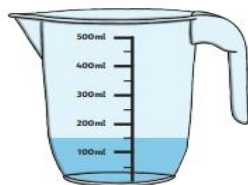
Maths

Capacity

How much water is in each jug?



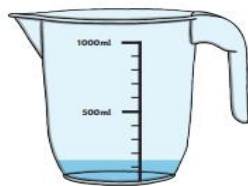
1. _____ ml



2. _____ ml




4. _____ ml



5. _____ ml

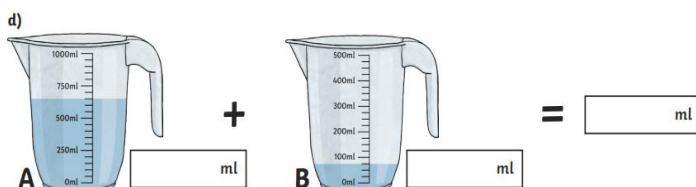
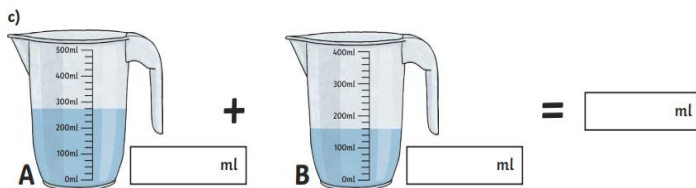


7. _____ ml



8. _____ ml

Calculate the total volume in each jug.



English

Grammar and Punctuation

Highlight the fronted adverbial in each sentence.

1. Slowly, Ollie walked into the playground to meet Sara.
2. At one point, a strong gust blew her right off her feet.
3. Luckily, his heavy feet were rooted to the ground.
4. At home, Ollie took off the yellow socks.
5. Every week, someone moaned about how cold it was in the pool.

Add your own fronted adverbials to each sentence.

1. _____, he was tired and ready for bed.
2. _____, the robber had stolen every penny from the safe.
3. _____, we have music assembly.
4. _____, he tiptoed down the creaky stairs.
5. _____, he ran as fast as he could.

Science

1. What is a light source?
2. Look for light sources at home.
3. Explain why the moon is not a light source.