

Year 3 Homework

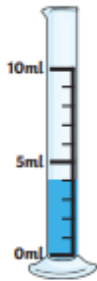
Friday 20th June 2025

- Homework is set every **Friday** and must be returned the following **Tuesday**.
- Please use a sharp pencil.
- A ruler should be used when drawing

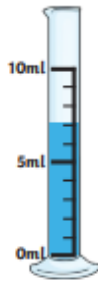
Maths

Capacity

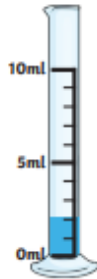
How much water is in each container?



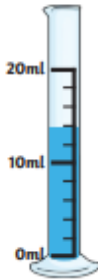
1. _____ ml



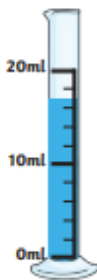
2. _____ ml



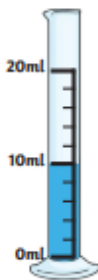
4. _____ ml



5. _____ ml



7. _____ ml



8. _____ ml

Grammar and Punctuation

Use **a** and **an** correctly in each sentence.

1. I saw _____ boy looking at me.
2. The man ate _____ apple.
3. The classroom is _____ noisy place,
4. Can I have _____ orange, please?
5. _____ tiger growls.
6. If it rains, use _____ umbrella,
7. I used _____ spoon to eat my dessert.
8. I saw _____ ugly troll.
9. _____ plant is _____ living thing,

Science

1. What is a light source?
2. Look for light sources at home.